

Given a line segment, distances from a point on the perpendicular bisector to the each end point of the line segment are same.

선분의 수직 이등분선 상의 점으로 부터
선분의 양 끝점 까지의 거리는 같다.

(Given a line segment, distances from a point on the perpendicular bisector to the each end point of the line segment are same.)

Given a line segment, distances from a point on the perpendicular bisector to the each end point of the line segment are same.

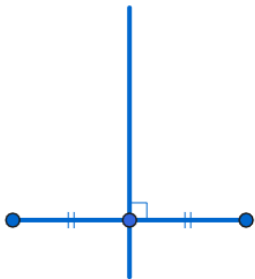
Given a line segment, distances from a point on the perpendicular bisector to the each end point of the line segment are same.



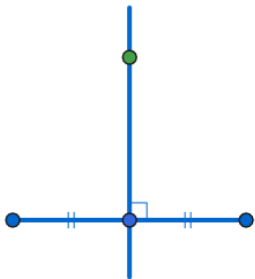
Given a line segment, distances from a point on the perpendicular bisector to the each end point of the line segment are same.



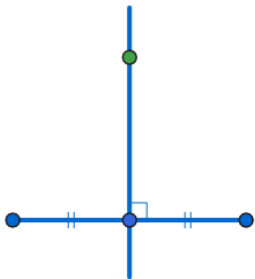
Given a line segment, distances from a point on the perpendicular bisector to the each end point of the line segment are same.



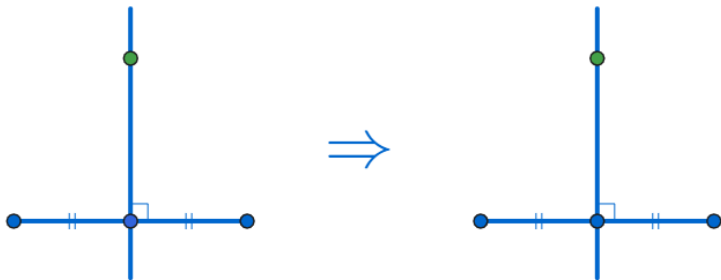
Given a line segment, distances from a point on the perpendicular bisector to the each end point of the line segment are same.



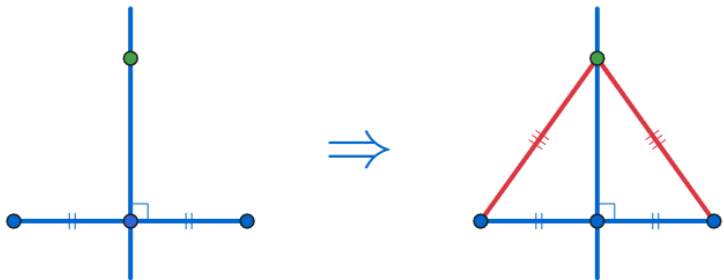
Given a line segment, distances from a point on the perpendicular bisector to the each end point of the line segment are same.



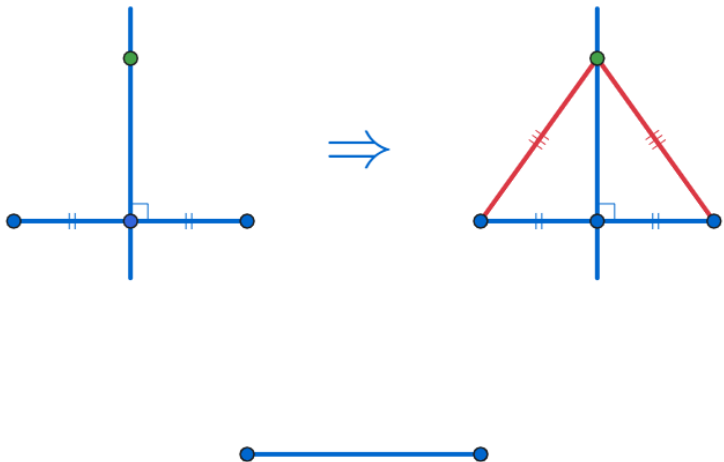
Given a line segment, distances from a point on the perpendicular bisector to the each end point of the line segment are same.



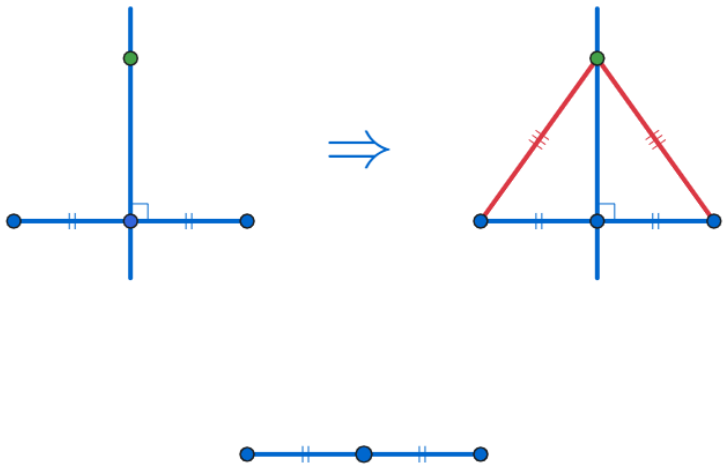
Given a line segment, distances from a point on the perpendicular bisector to the each end point of the line segment are same.



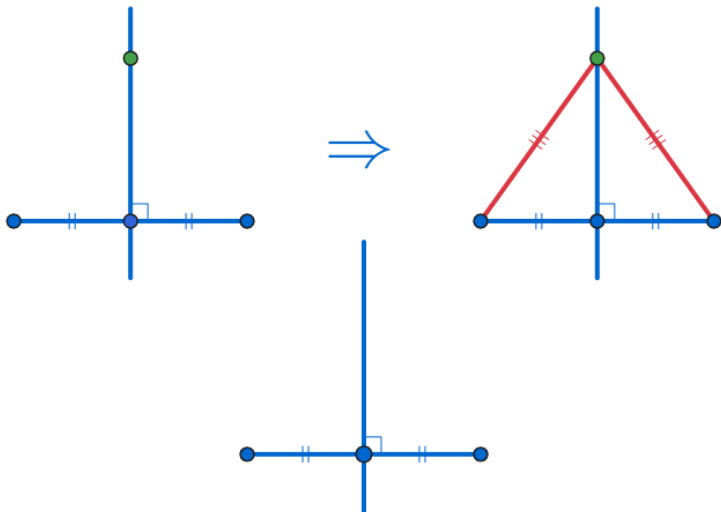
Given a line segment, distances from a point on the perpendicular bisector to the each end point of the line segment are same.



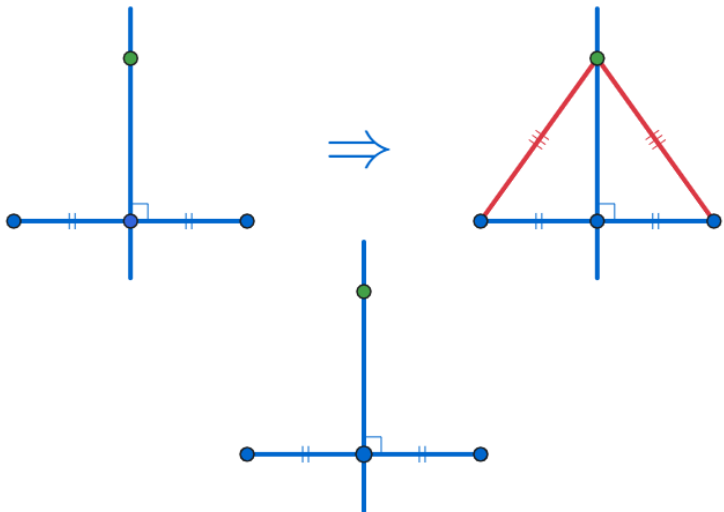
Given a line segment, distances from a point on the perpendicular bisector to the each end point of the line segment are same.



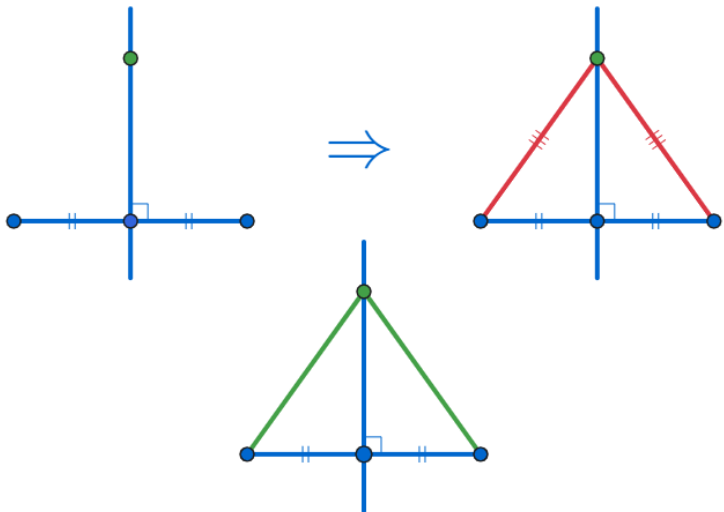
Given a line segment, distances from a point on the perpendicular bisector to the each end point of the line segment are same.



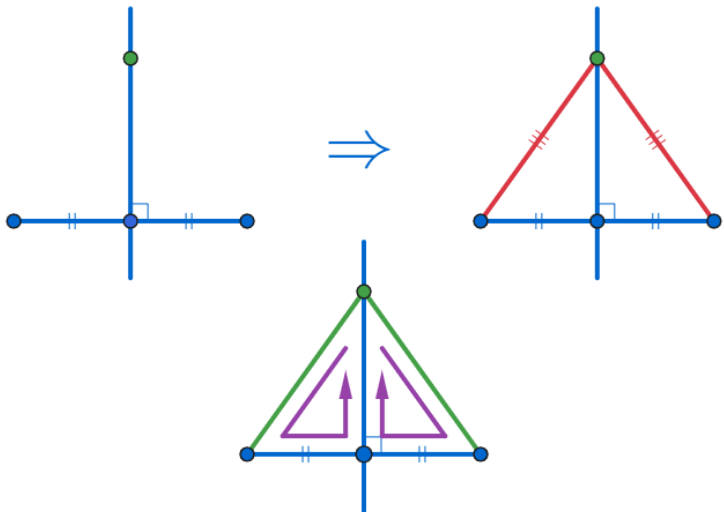
Given a line segment, distances from a point on the perpendicular bisector to the each end point of the line segment are same.



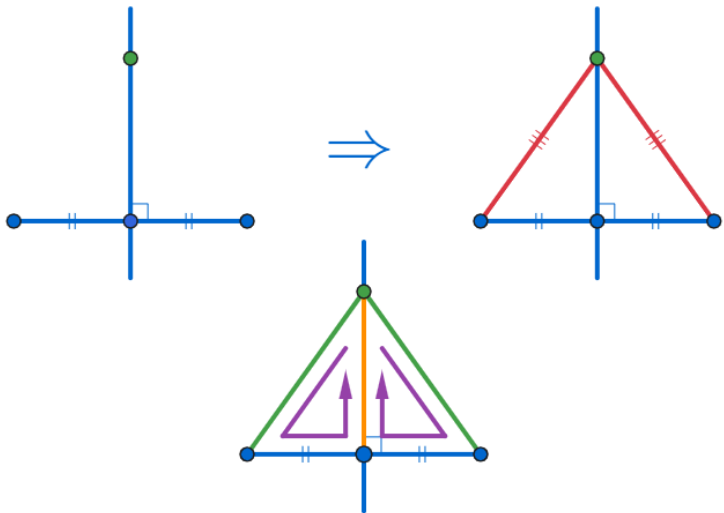
Given a line segment, distances from a point on the perpendicular bisector to the each end point of the line segment are same.



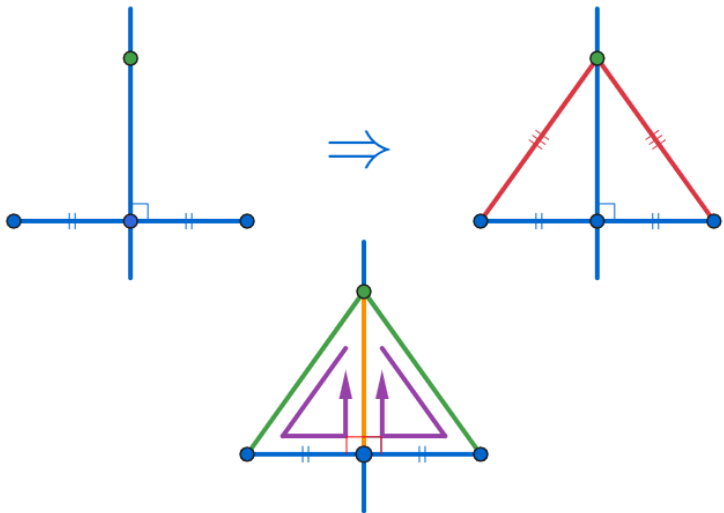
Given a line segment, distances from a point on the perpendicular bisector to the each end point of the line segment are same.



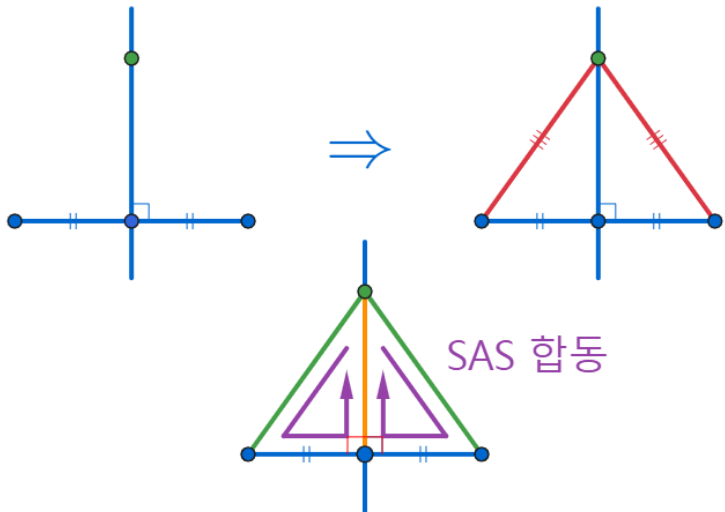
Given a line segment, distances from a point on the perpendicular bisector to the each end point of the line segment are same.



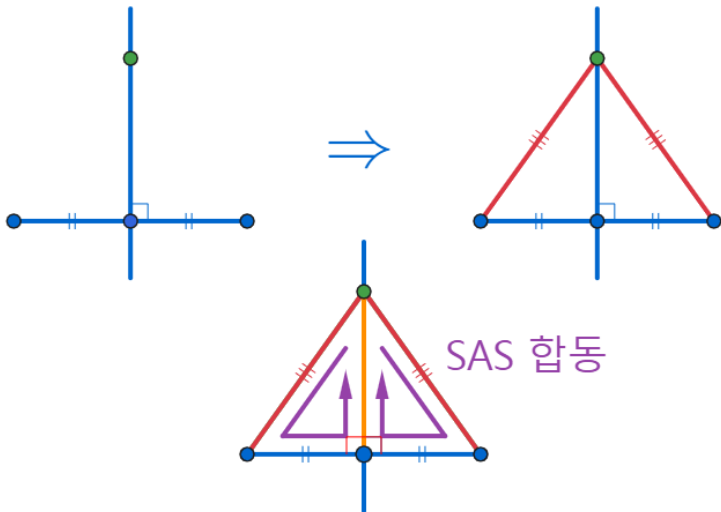
Given a line segment, distances from a point on the perpendicular bisector to the each end point of the line segment are same.



Given a line segment, distances from a point on the perpendicular bisector to the each end point of the line segment are same.



Given a line segment, distances from a point on the perpendicular bisector to the each end point of the line segment are same.



Given a line segment, distances from a point on the perpendicular bisector to the each end point of the line segment are same.

YouTube: <https://youtu.be/Cy3MiCxxNkA>

AlgeoMath: <http://me2.do/Fp0TTJmO>

Click or paste URL into the URL search bar, and you can see a picture moving.