

무게중심에서 각 꼭짓점까지 이르는 거리가 주어졌을 때 삼각형 작도하기
(Constructing a triangle given the three distances from centroid to each vertex)

Constructing a triangle given the three distances from centroid to each vertex

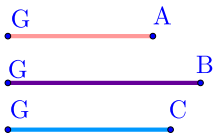
▶ Start

▶ End

Constructing a triangle given the three distances from centroid to each vertex

▶ Start

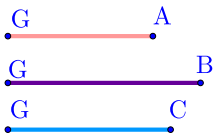
▶ End



Constructing a triangle given the three distances from centroid to each vertex

▶ Start

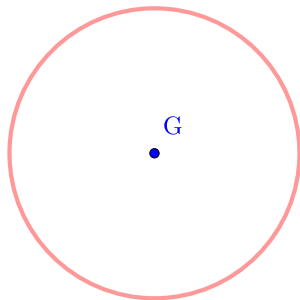
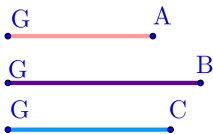
▶ End



Constructing a triangle given the three distances from centroid to each vertex

▶ Start

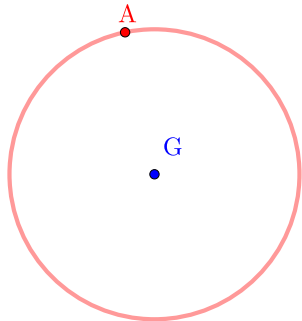
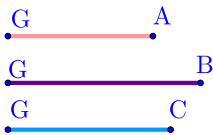
▶ End



Constructing a triangle given the three distances from centroid to each vertex

▶ Start

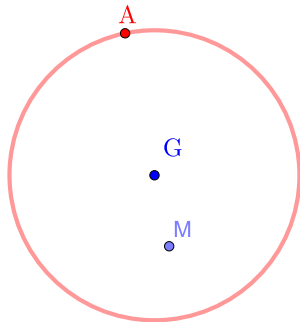
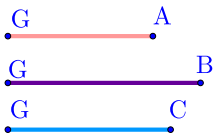
▶ End



Constructing a triangle given the three distances from centroid to each vertex

▶ Start

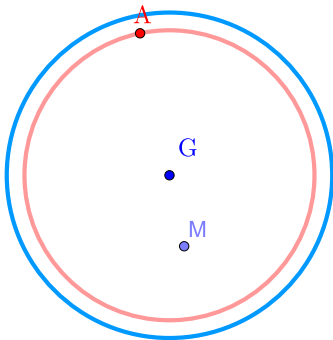
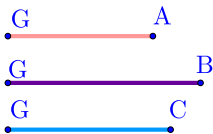
▶ End



Constructing a triangle given the three distances from centroid to each vertex

▶ Start

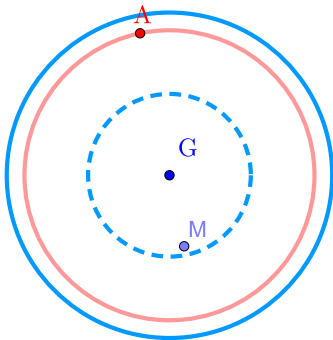
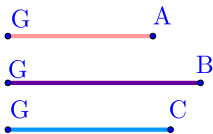
▶ End



Constructing a triangle given the three distances from centroid to each vertex

▶ Start

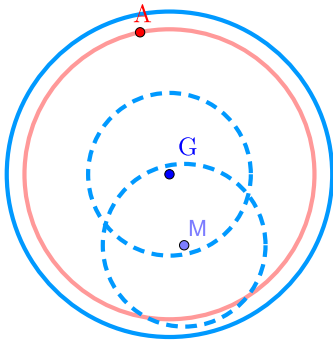
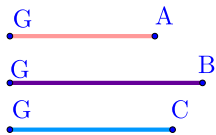
▶ End



Constructing a triangle given the three distances from centroid to each vertex

▶ Start

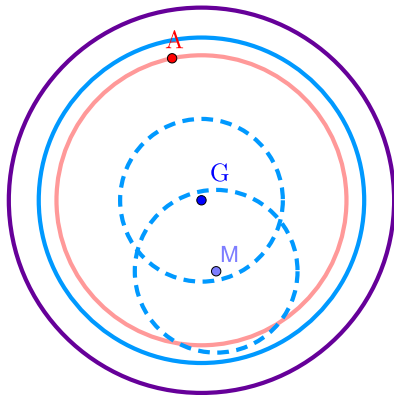
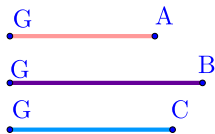
▶ End



Constructing a triangle given the three distances from centroid to each vertex

▶ Start

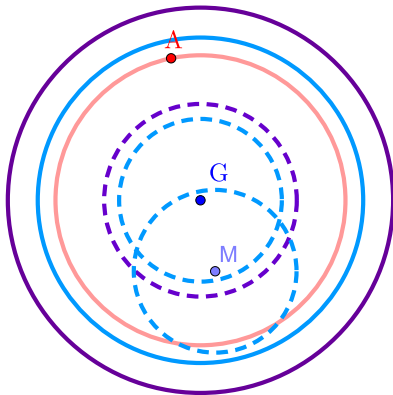
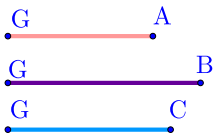
▶ End



Constructing a triangle given the three distances from centroid to each vertex

▶ Start

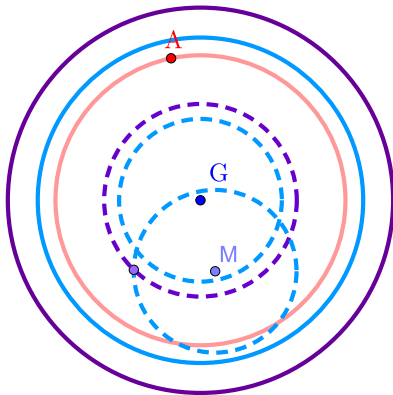
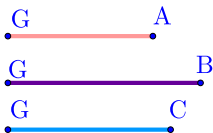
▶ End



Constructing a triangle given the three distances from centroid to each vertex

▶ Start

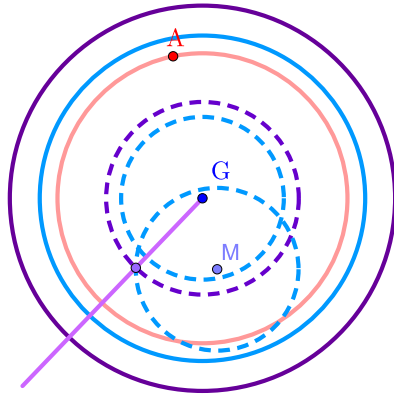
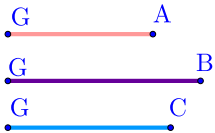
▶ End



Constructing a triangle given the three distances from centroid to each vertex

▶ Start

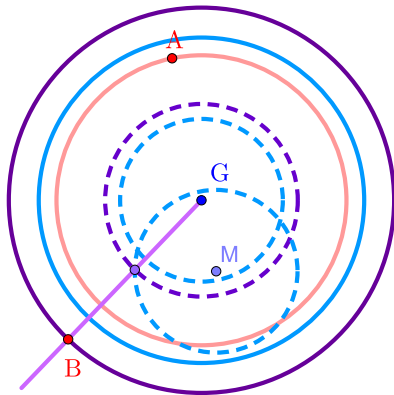
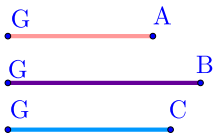
▶ End



Constructing a triangle given the three distances from centroid to each vertex

▶ Start

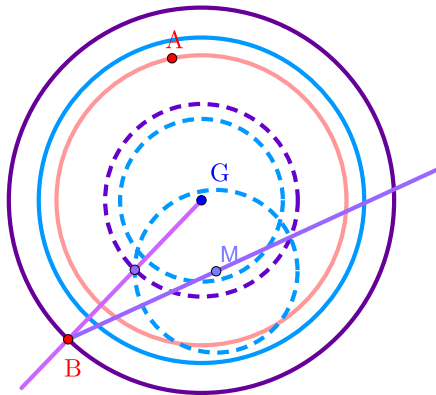
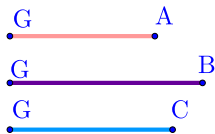
▶ End



Constructing a triangle given the three distances from centroid to each vertex

▶ Start

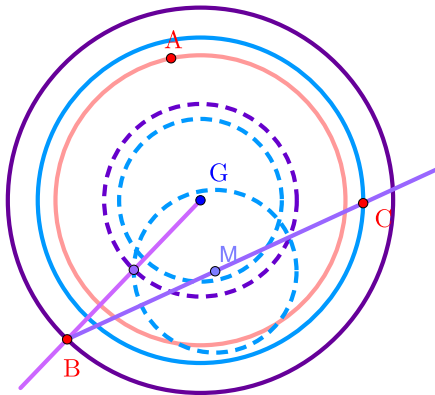
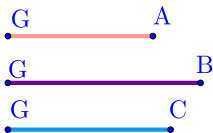
▶ End



Constructing a triangle given the three distances from centroid to each vertex

▶ Start

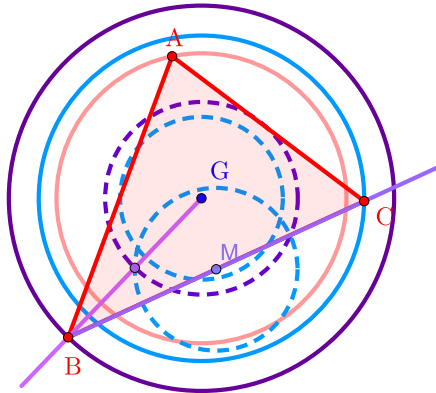
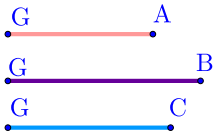
▶ End



Constructing a triangle given the three distances from centroid to each vertex

▶ Start

▶ End



Github:

<https://min7014.github.io/math20210819001.html>

Click or paste URL into the URL search bar,
and you can see a picture moving.