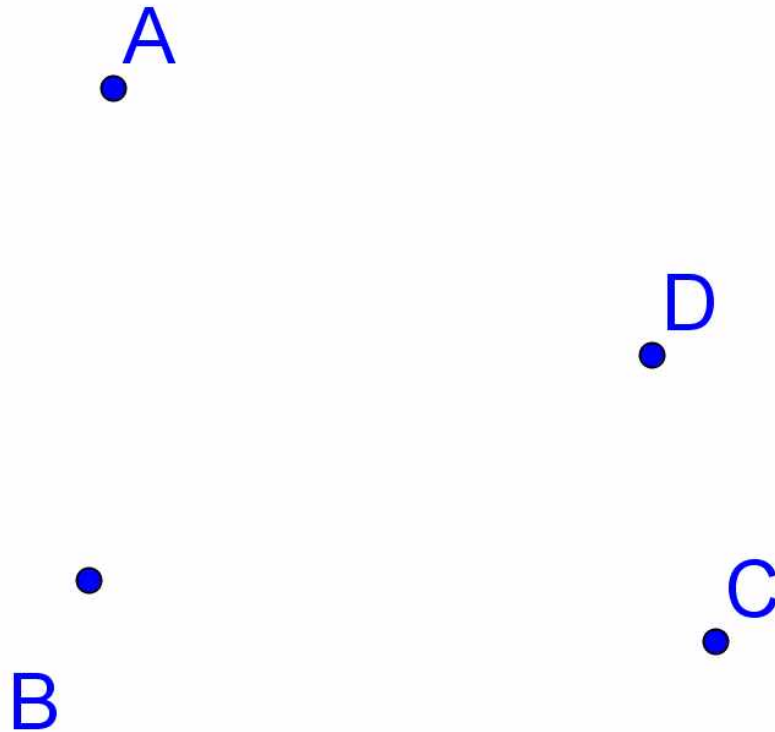


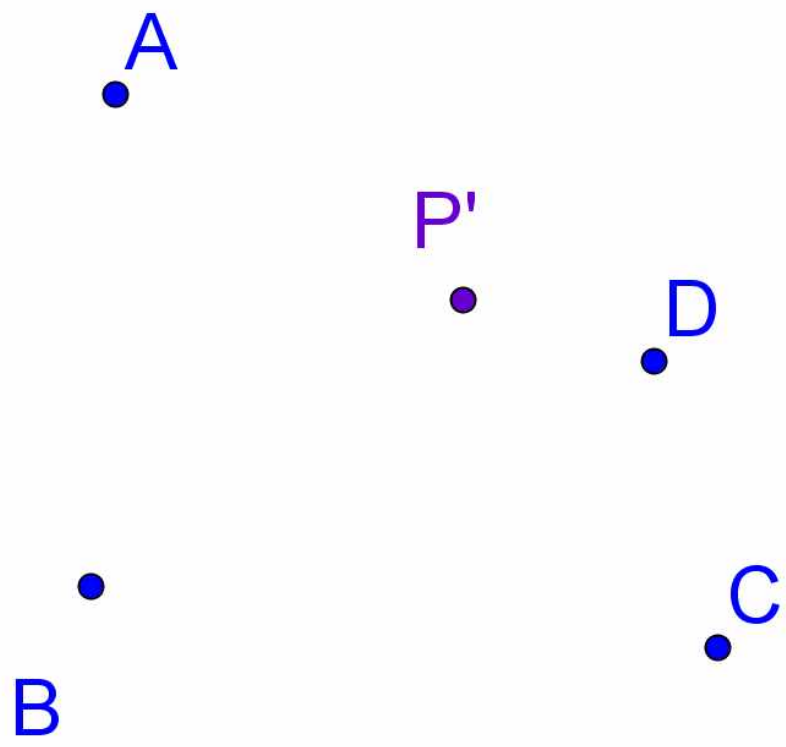
네 점에서 거리의 합이 최소인 점

□ 1 □ 2 □ 3 □ 4 □ 5 □ 6 □ 7 □ 8 □ 9 □ 10

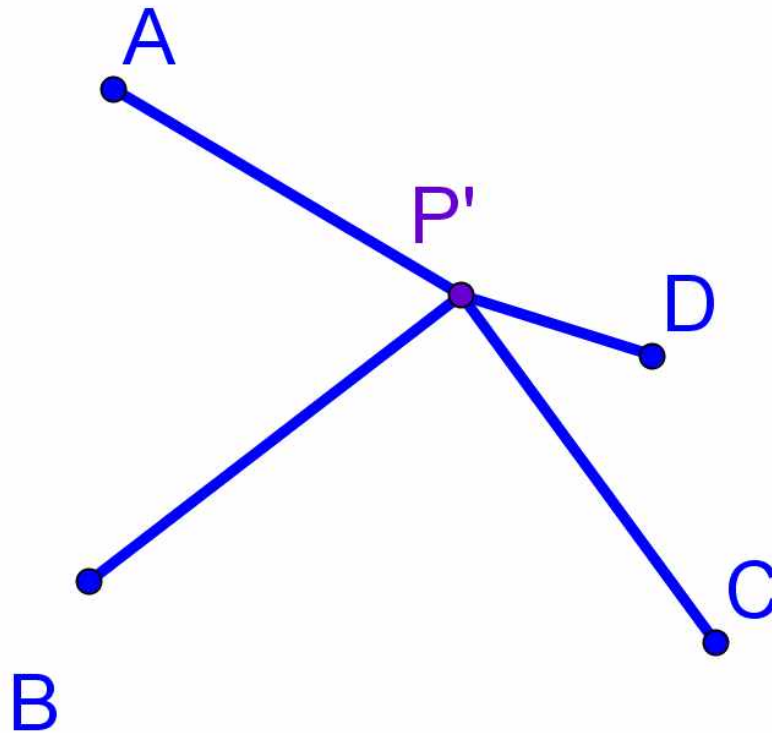
1 2 3 4 5 6 7 8 9 10



1 2 3 4 5 6 7 8 9 10

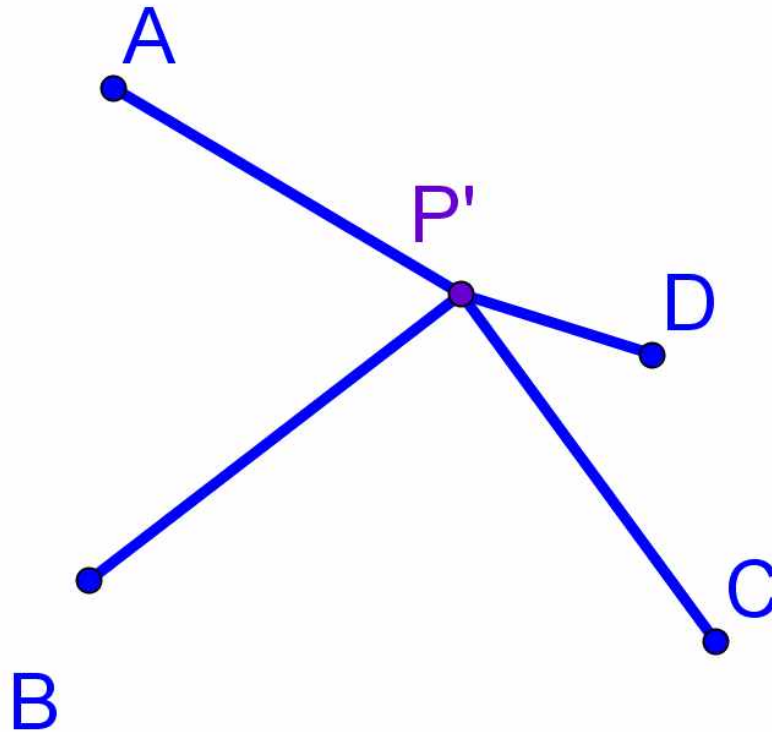


1 2 3 4 5 6 7 8 9 10



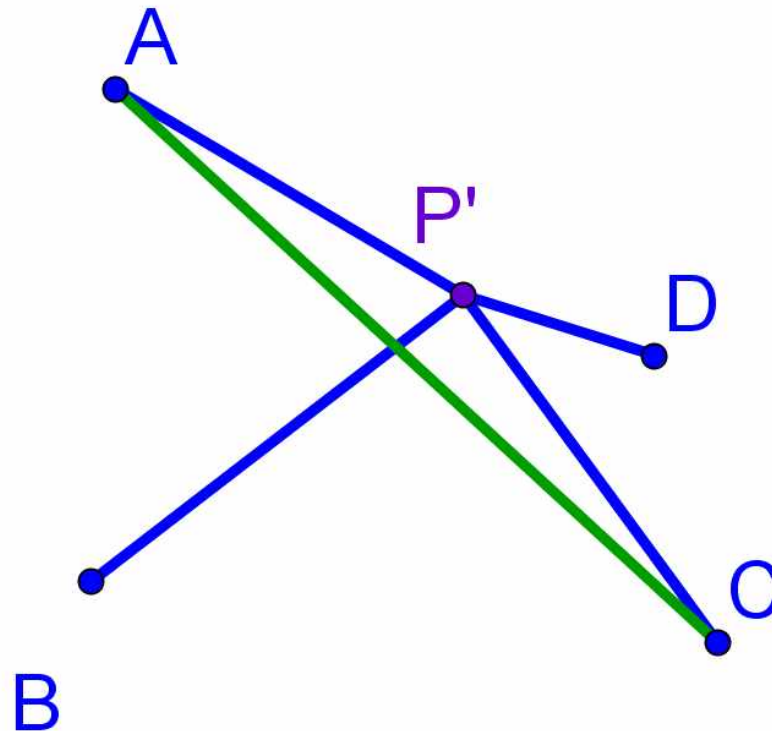
1 2 3 4 5 6 7 8 9 10

$$\overline{AP'} + \overline{BP'} + \overline{CP'} + \overline{DP'} = 12.43$$



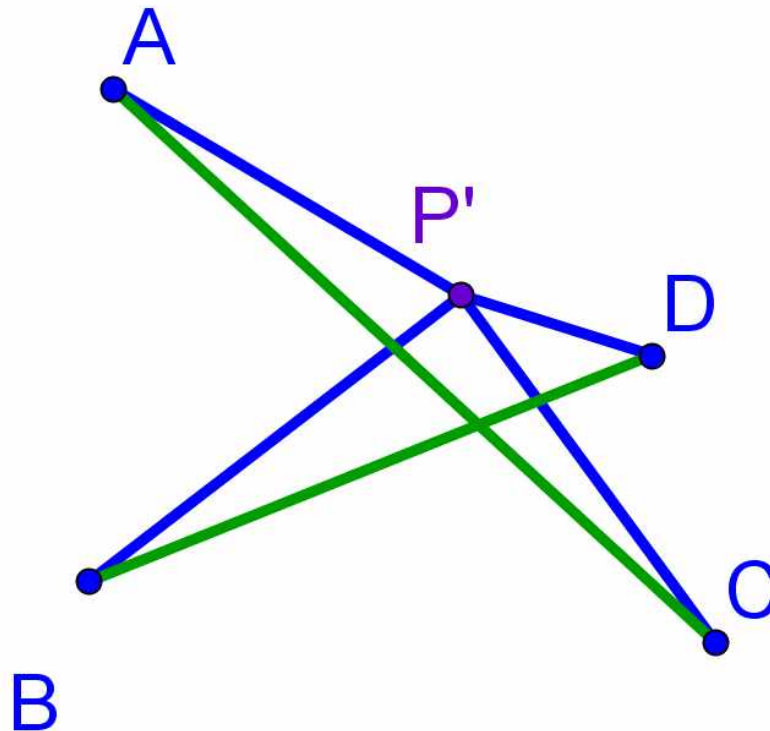
1 2 3 4 5 6 7 8 9 10

$$\overline{AP'} + \overline{BP'} + \overline{CP'} + \overline{DP'} = 12.43$$



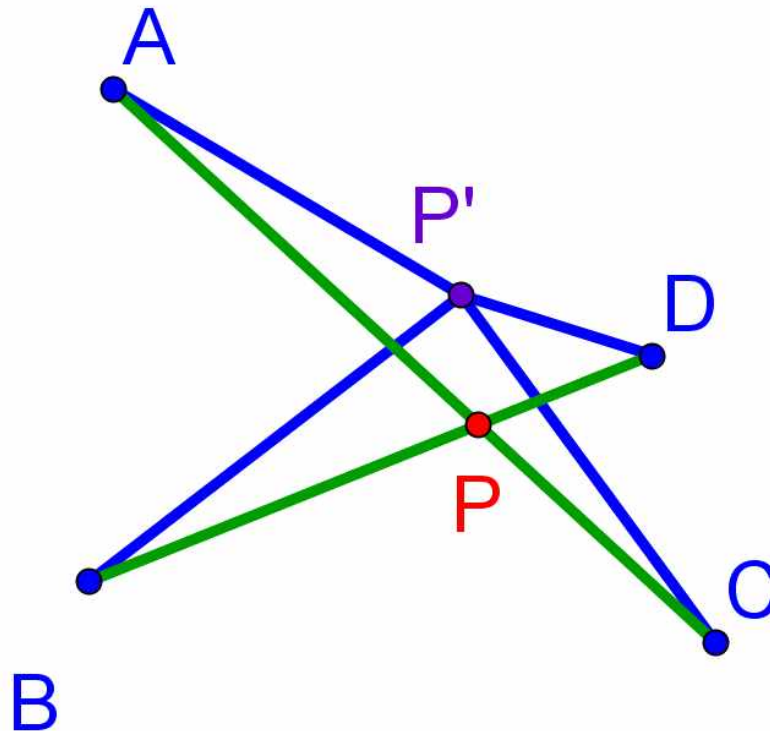
1 2 3 4 5 6 7 8 9 10

$$\overline{AP'} + \overline{BP'} + \overline{CP'} + \overline{DP'} = 12.43$$



1 2 3 4 5 6 7 8 9 10

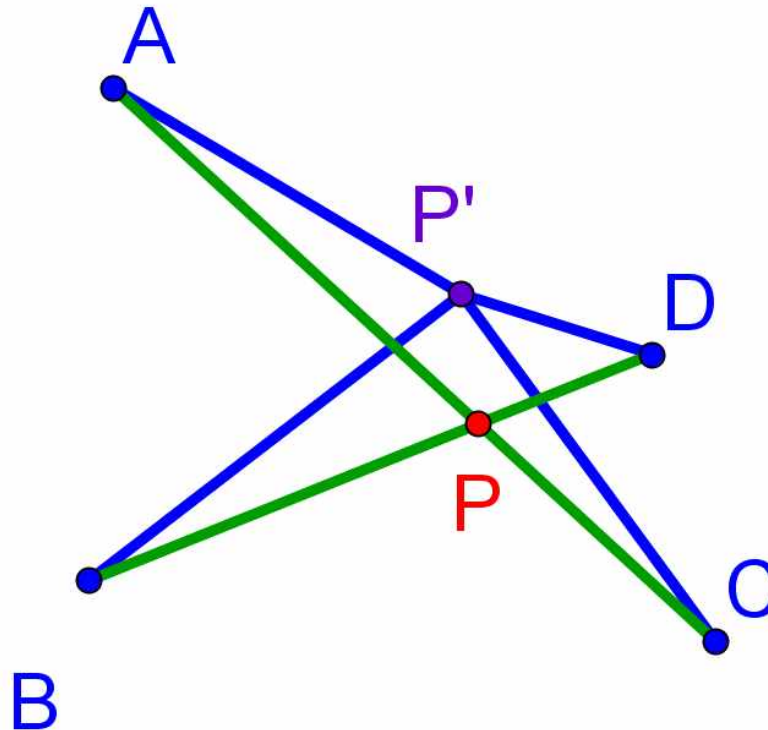
$$\overline{AP'} + \overline{BP'} + \overline{CP'} + \overline{DP'} = 12.43$$



1 2 3 4 5 6 7 8 9 10

$$\overline{AP'} + \overline{BP'} + \overline{CP'} + \overline{DP'} = 12.43$$

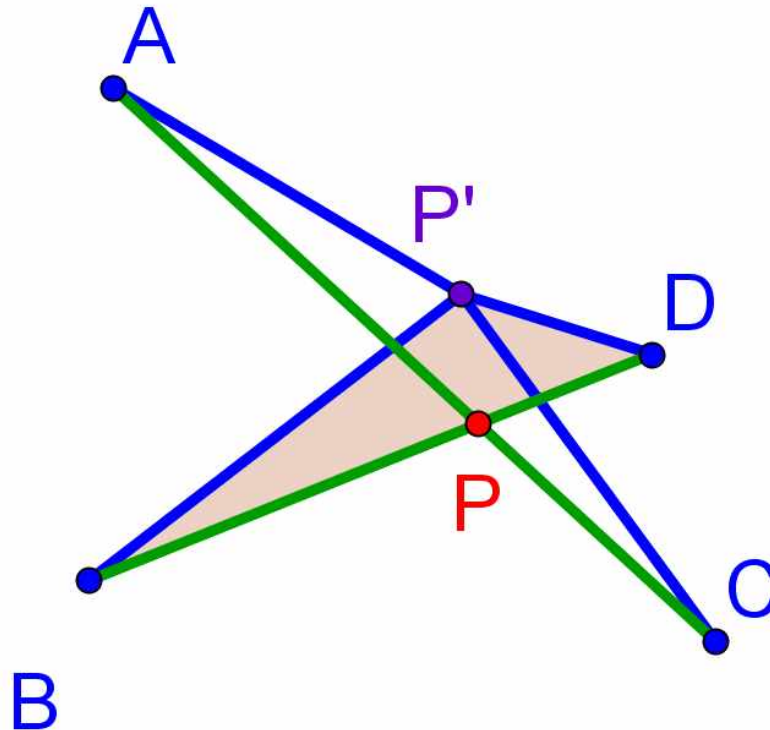
$$\overline{AP} + \overline{BP} + \overline{CP} + \overline{DP} = 11.77$$



1 2 3 4 5 6 7 8 9 10

$$\overline{AP'} + \overline{BP'} + \overline{CP'} + \overline{DP'} = 12.43$$

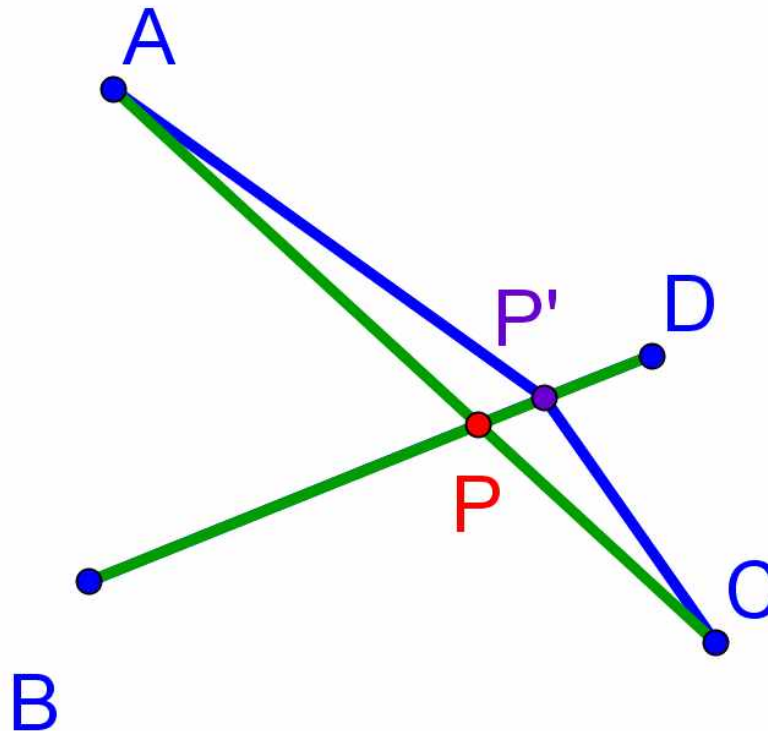
$$\overline{AP} + \overline{BP} + \overline{CP} + \overline{DP} = 11.77$$



1 2 3 4 5 6 7 8 9 10

$$\overline{AP'} + \overline{BP'} + \overline{CP'} + \overline{DP'} = 11.86$$

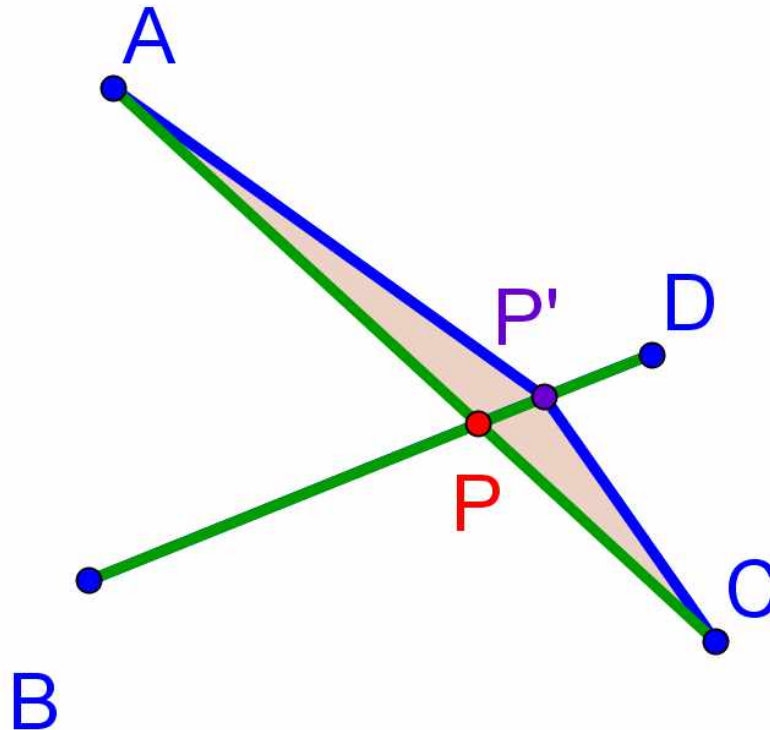
$$\overline{AP} + \overline{BP} + \overline{CP} + \overline{DP} = 11.77$$



☑ 1 ☑ 2 ☑ 3 ☑ 4 ☑ 5 ☑ 6 ☑ 7 ☑ 8 ☑ 9 ☑ 10

$$\overline{AP'} + \overline{BP'} + \overline{CP'} + \overline{DP'} = 11.86$$

$$\overline{AP} + \overline{BP} + \overline{CP} + \overline{DP} = 11.77$$



1 2 3 4 5 6 7 8 9 10

$$\overline{AP'} + \overline{BP'} + \overline{CP'} + \overline{DP'} = 11.77$$

$$\overline{AP} + \overline{BP} + \overline{CP} + \overline{DP} = 11.77$$

