

What is range of the dot product of two position vectors in the plane of which the end point of one is on a circle?

평면에서 두 위치벡터에 대하여 한 위치 벡터의 종점이 원 위에 있을 때 두 위치벡터의 내적의 범위는 무엇인가?

(What is range of the dot product of two position vectors in the plane of which the end point of one is on a circle?)

What is range of the dot product of two position vectors in the plane of which the end point of one is on a circle?

▶ Start

What is range of the dot product of two position vectors in the plane of which the end point of one is on a circle?

▶ Start

O



What is range of the dot product of two position vectors in the plane of which the end point of one is on a circle?

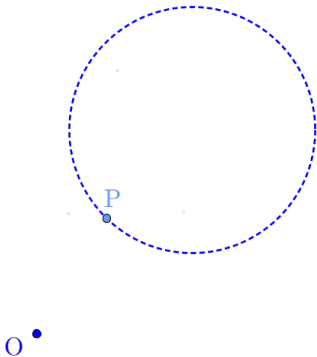
▶ Start



O

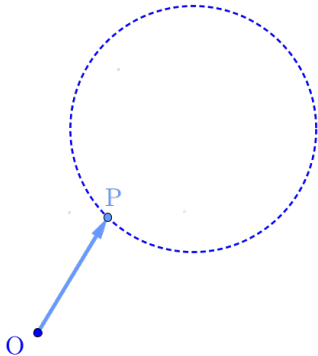
What is range of the dot product of two position vectors in the plane of which the end point of one is on a circle?

▶ Start



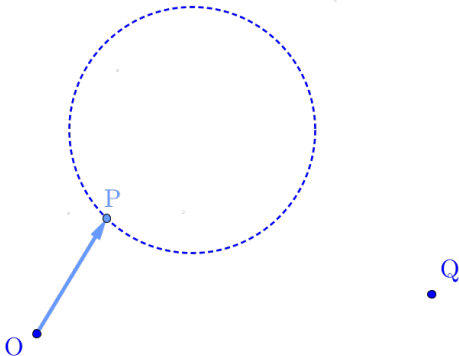
What is range of the dot product of two position vectors in the plane of which the end point of one is on a circle?

▶ Start



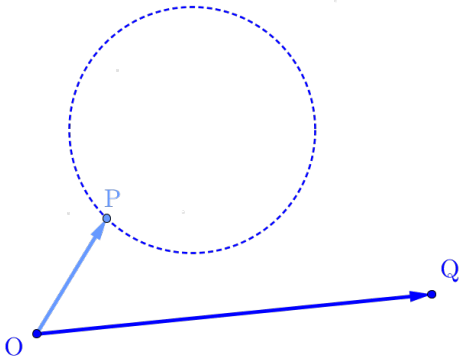
What is range of the dot product of two position vectors in the plane of which the end point of one is on a circle?

▶ Start



What is range of the dot product of two position vectors in the plane of which the end point of one is on a circle?

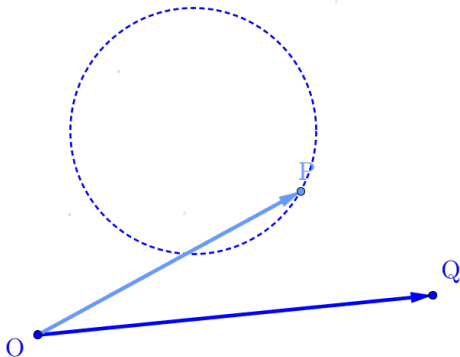
▶ Start





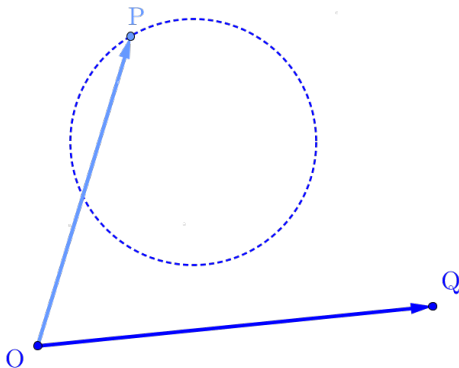
What is range of the dot product of two position vectors in the plane of which the end point of one is on a circle?

▶ Start



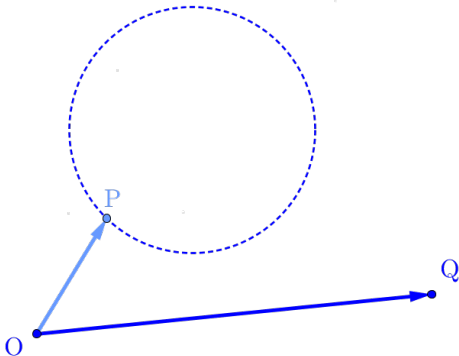
What is range of the dot product of two position vectors in the plane of which the end point of one is on a circle?

▶ Start



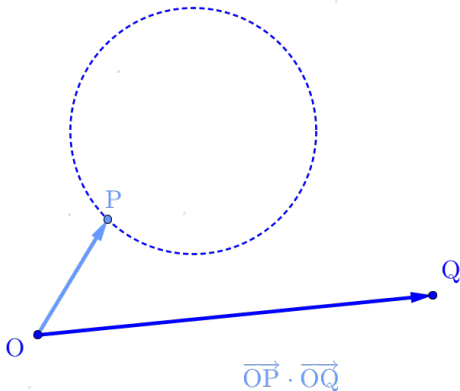
What is range of the dot product of two position vectors in the plane of which the end point of one is on a circle?

▶ Start



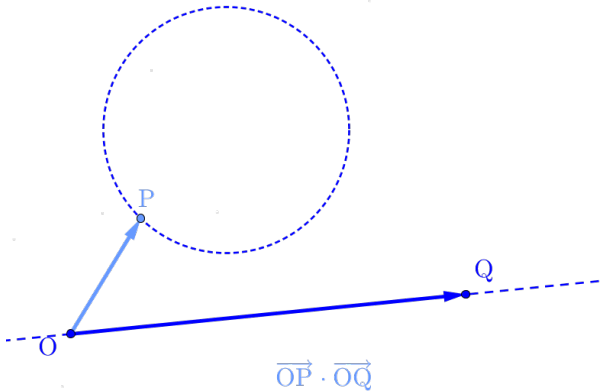
What is range of the dot product of two position vectors in the plane of which the end point of one is on a circle?

▶ Start



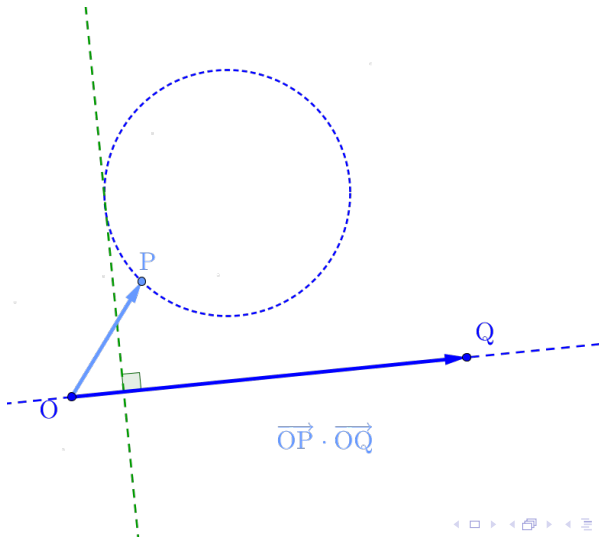
What is range of the dot product of two position vectors in the plane of which the end point of one is on a circle?

▶ Start



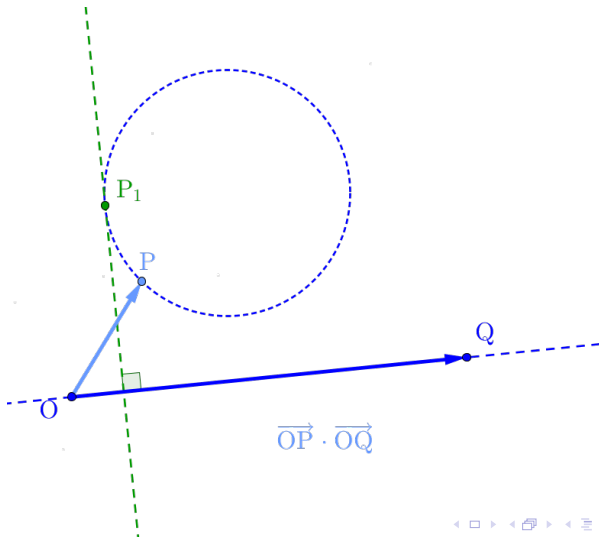
What is range of the dot product of two position vectors in the plane of which the end point of one is on a circle?

▶ Start



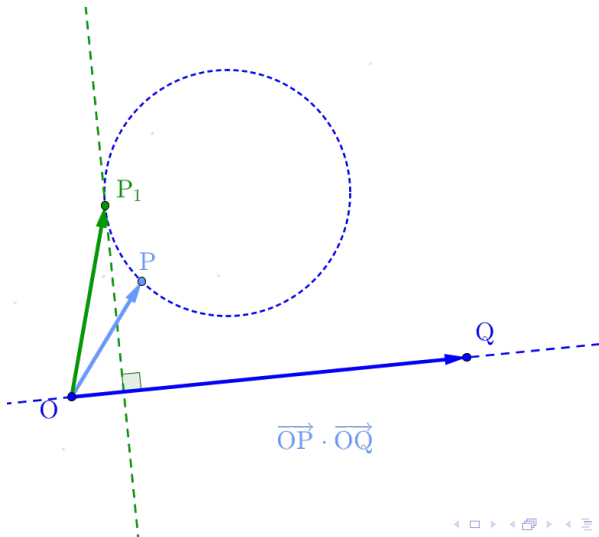
What is range of the dot product of two position vectors in the plane of which the end point of one is on a circle?

▶ Start



What is range of the dot product of two position vectors in the plane of which the end point of one is on a circle?

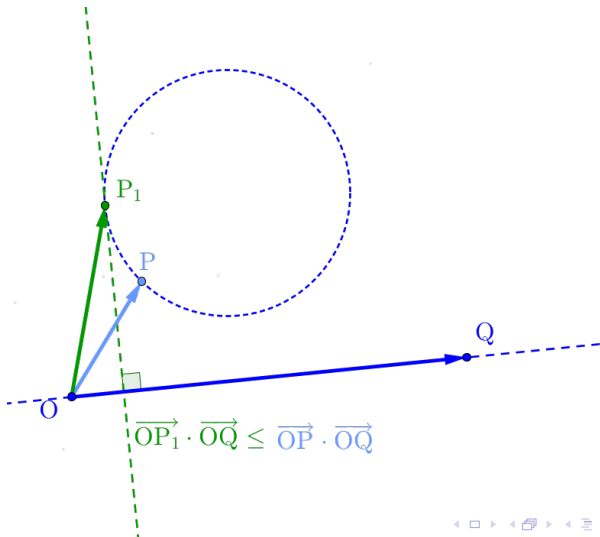
▶ Start





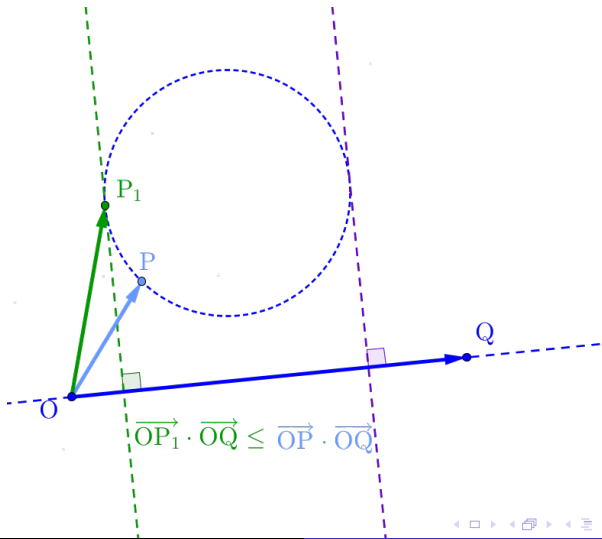
What is range of the dot product of two position vectors in the plane of which the end point of one is on a circle?

▶ Start



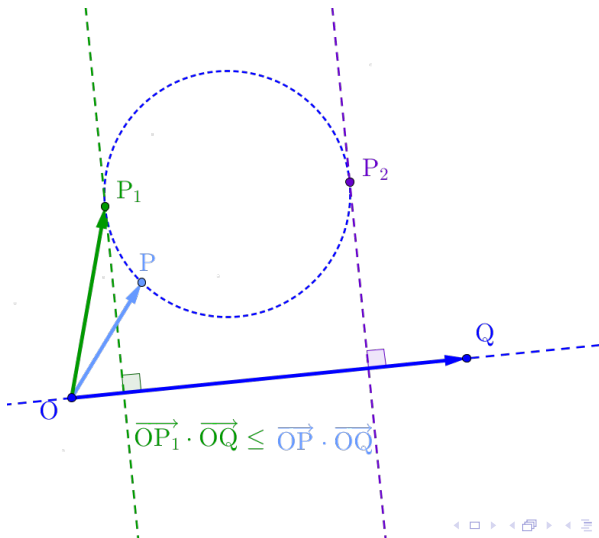
What is range of the dot product of two position vectors in the plane of which the end point of one is on a circle?

▶ Start



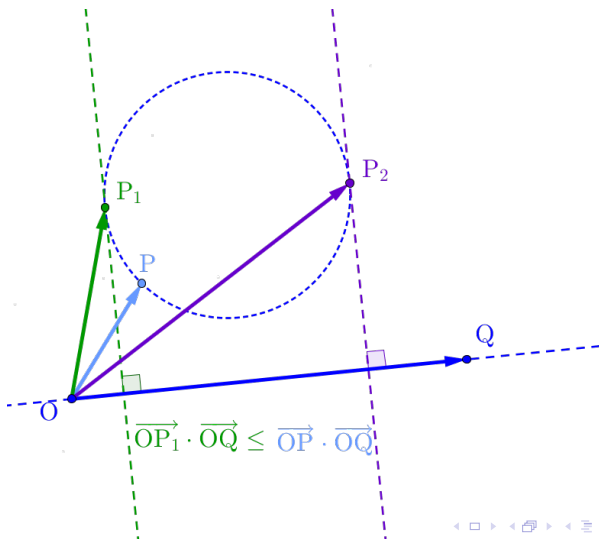
What is range of the dot product of two position vectors in the plane of which the end point of one is on a circle?

▶ Start



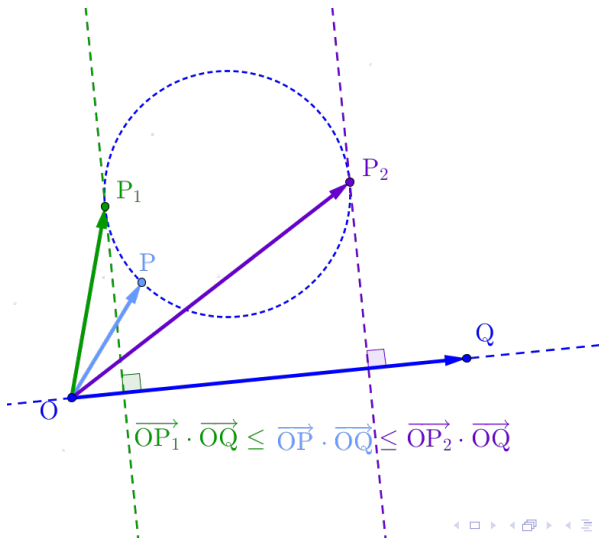
What is range of the dot product of two position vectors in the plane of which the end point of one is on a circle?

▶ Start



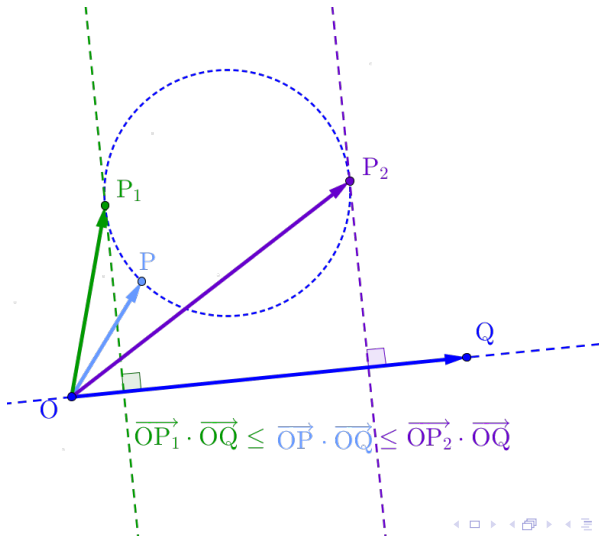
What is range of the dot product of two position vectors in the plane of which the end point of one is on a circle?

▶ Start



What is range of the dot product of two position vectors in the plane of which the end point of one is on a circle?

Home



What is range of the dot product of two position vectors in the plane of which the end point of one is on a circle?

gif: <http://me2.do/52L5rrwu>

Click or paste URL into the URL search bar, and you can see a picture moving.