

Constructing a triangle given the three distances from centroid to each midpoint of side

무게중심에서 각 변의 중점까지 이르는 세
거리가 주어 졌을 때 삼각형 작도하기

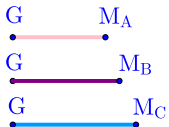
(Constructing a triangle given the three distances from centroid to each midpoint of side)

Constructing a triangle given the three distances from centroid to each midpoint of side

▶ Start

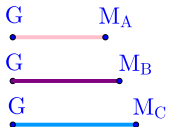
Constructing a triangle given the three distances from centroid to each midpoint of side

▶ Start



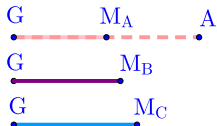
Constructing a triangle given the three distances from centroid to each midpoint of side

▶ Start



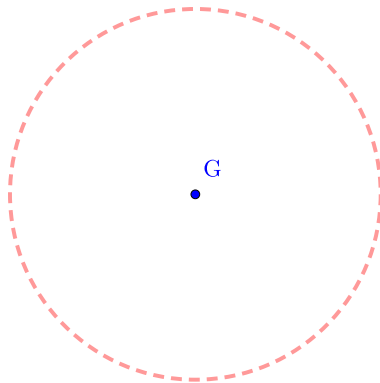
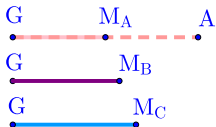
Constructing a triangle given the three distances from centroid to each midpoint of side

▶ Start



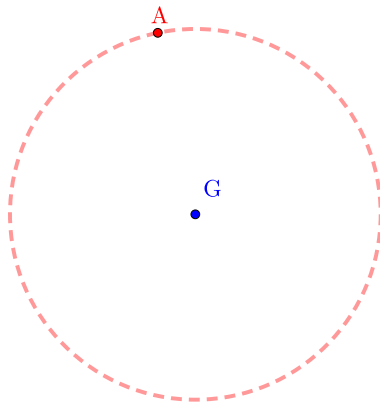
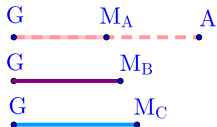
Constructing a triangle given the three distances from centroid to each midpoint of side

▶ Start



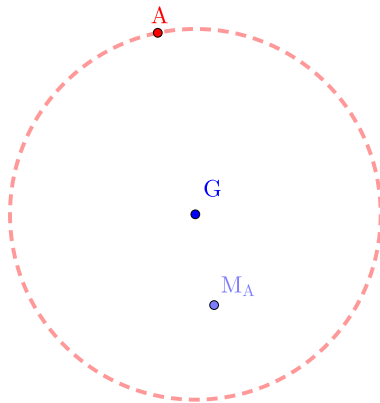
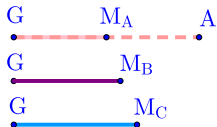
Constructing a triangle given the three distances from centroid to each midpoint of side

▶ Start



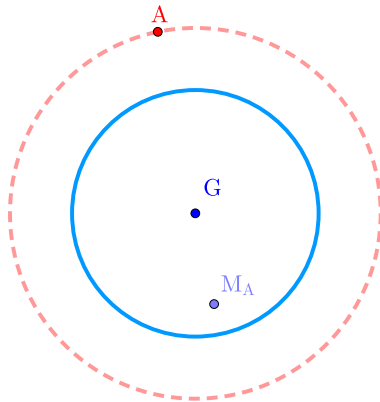
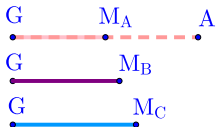
Constructing a triangle given the three distances from centroid to each midpoint of side

▶ Start



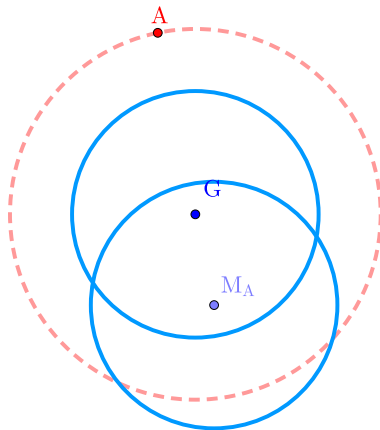
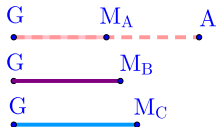
Constructing a triangle given the three distances from centroid to each midpoint of side

▶ Start



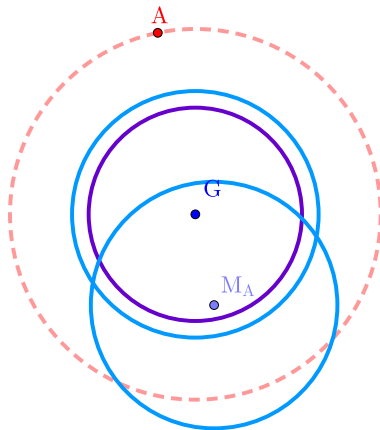
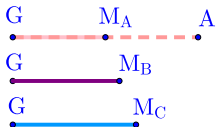
Constructing a triangle given the three distances from centroid to each midpoint of side

▶ Start



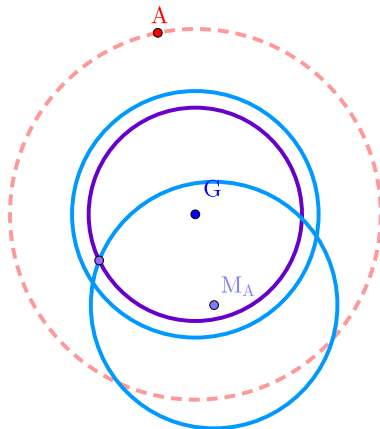
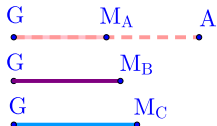
Constructing a triangle given the three distances from centroid to each midpoint of side

▶ Start



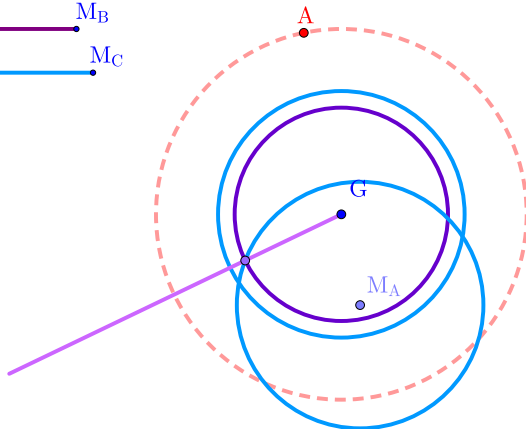
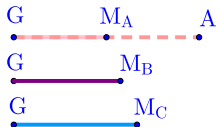
Constructing a triangle given the three distances from centroid to each midpoint of side

▶ Start



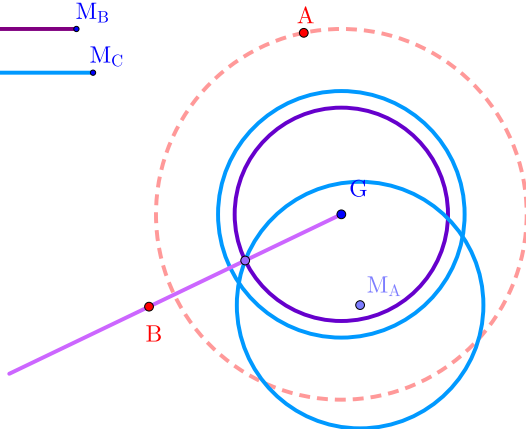
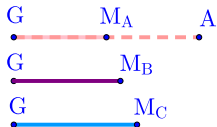
Constructing a triangle given the three distances from centroid to each midpoint of side

▶ Start



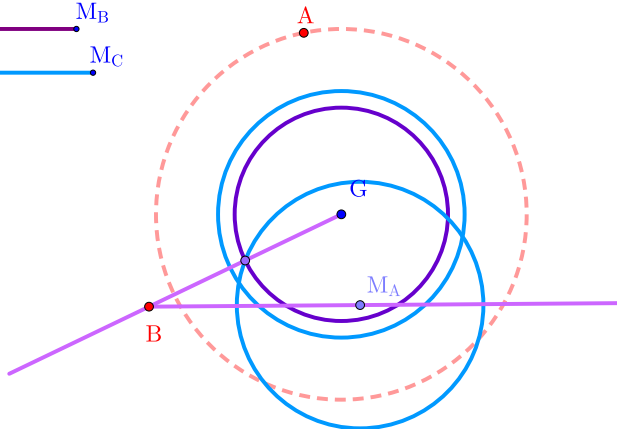
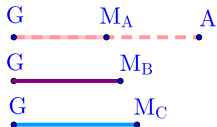
Constructing a triangle given the three distances from centroid to each midpoint of side

▶ Start



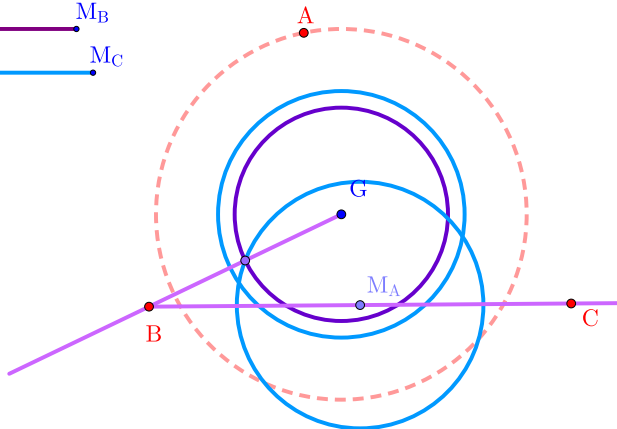
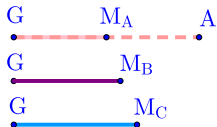
Constructing a triangle given the three distances from centroid to each midpoint of side

▶ Start



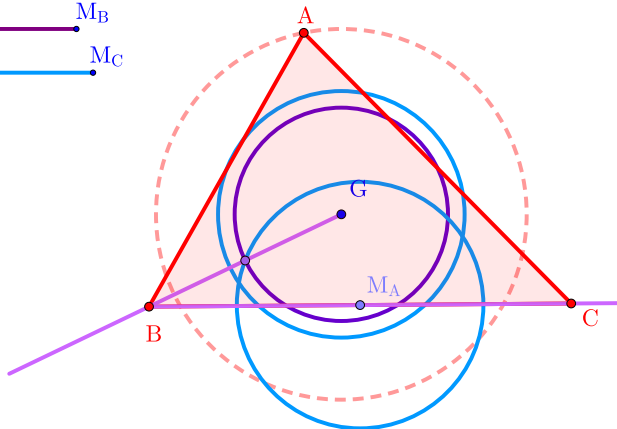
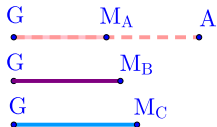
Constructing a triangle given the three distances from centroid to each midpoint of side

▶ Start



Constructing a triangle given the three distances from centroid to each midpoint of side

▶ Start



Constructing a triangle given the three distances from centroid to each midpoint of side

▶ Home

