

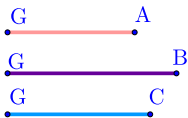
무게중심에서 각 꼭짓점까지 이르는
거리가 주어 졌을 때 삼각형 작도하기
(Constructing a triangle given the three distances from centroid to each
vertex)

Constructing a triangle given the three distances from centroid to each vertex

▶ Start

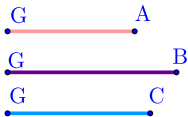
Constructing a triangle given the three distances from centroid to each vertex

▶ Start



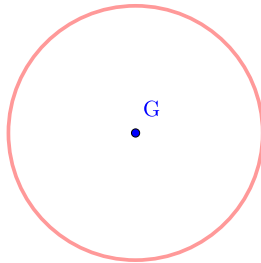
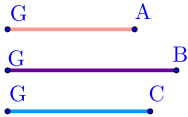
Constructing a triangle given the three distances from centroid to each vertex

▶ Start



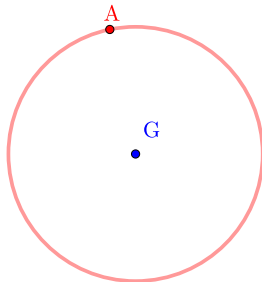
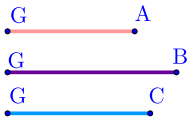
Constructing a triangle given the three distances from centroid to each vertex

▶ Start



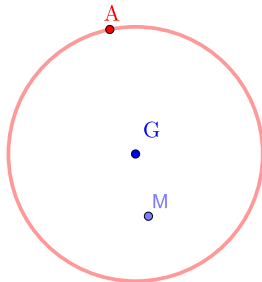
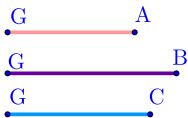
Constructing a triangle given the three distances from centroid to each vertex

▶ Start



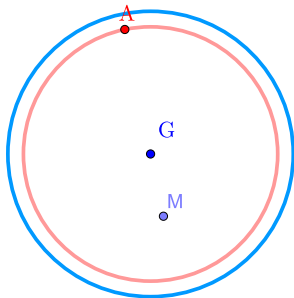
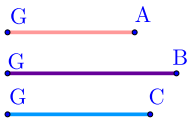
Constructing a triangle given the three distances from centroid to each vertex

▶ Start



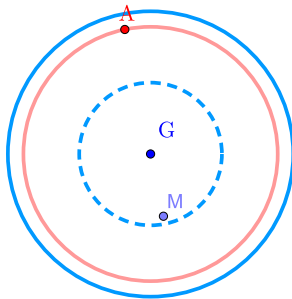
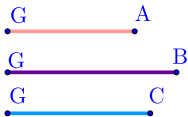
Constructing a triangle given the three distances from centroid to each vertex

▶ Start



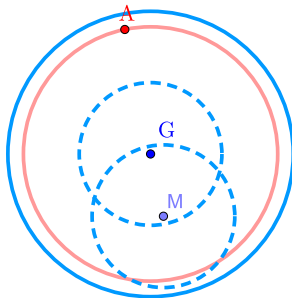
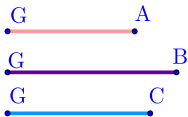
Constructing a triangle given the three distances from centroid to each vertex

▶ Start



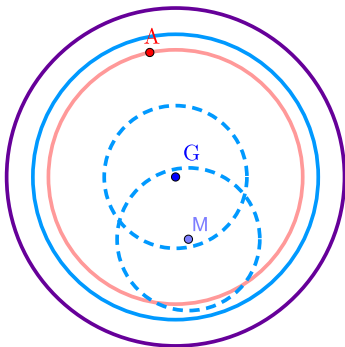
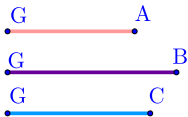
Constructing a triangle given the three distances from centroid to each vertex

▶ Start



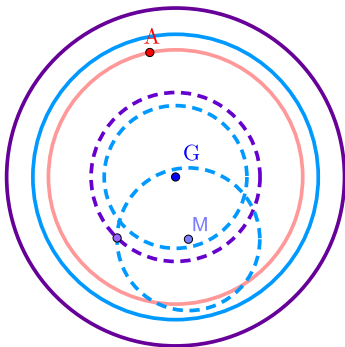
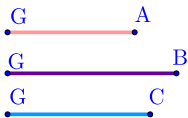
Constructing a triangle given the three distances from centroid to each vertex

▶ Start



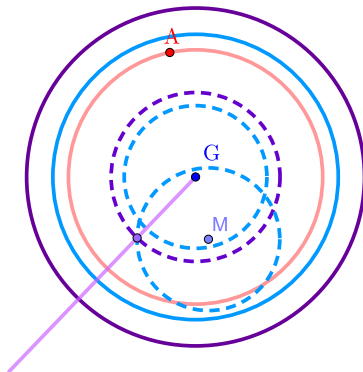
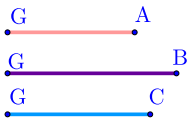
Constructing a triangle given the three distances from centroid to each vertex

▶ Start



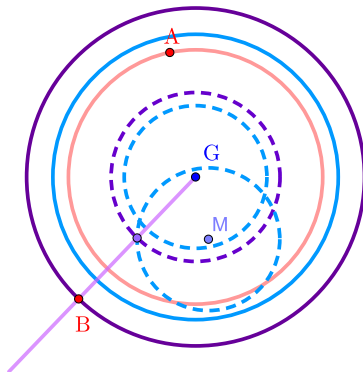
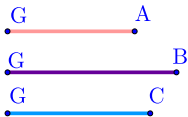
Constructing a triangle given the three distances from centroid to each vertex

▶ Start



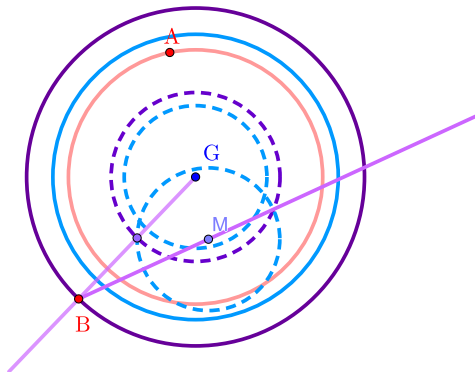
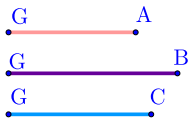
Constructing a triangle given the three distances from centroid to each vertex

▶ Start



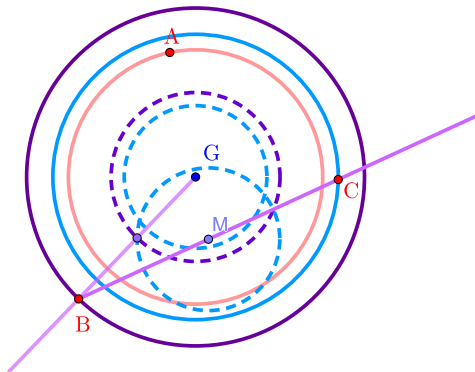
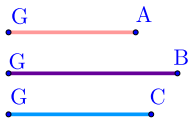
Constructing a triangle given the three distances from centroid to each vertex

▶ Start



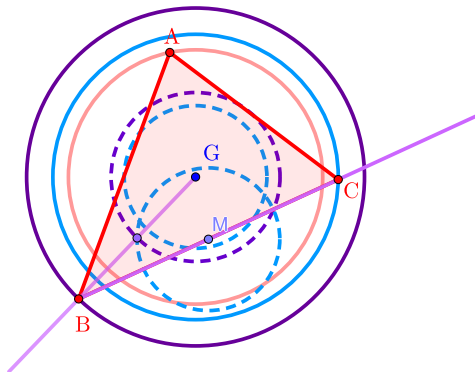
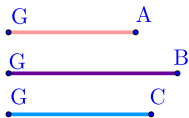
Constructing a triangle given the three distances from centroid to each vertex

▶ Start



Constructing a triangle given the three distances from centroid to each vertex

▶ Start



Constructing a triangle given the three distances from centroid to each vertex

▶ Home

